

Lesson 27. Triple Integrals

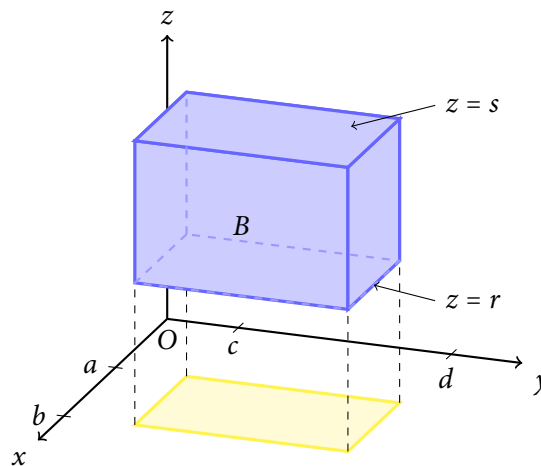
1 Overview

- Integrals of 3-variable functions over 3D regions of integration

2 Triple integrals over rectangular boxes

- **Fubini's theorem for triple integrals.** Let $B = \{(x, y, z) \mid a \leq x \leq b, c \leq y \leq d, r \leq z \leq s\}$. Then

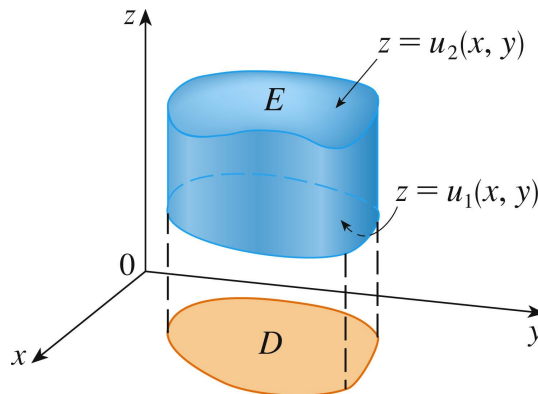
- (f continuous on B)
- Integrate from the inside out
- When all limits of integration are constant, we can integrate in any order



Example 1. Evaluate the triple integral $\iiint_B x \, dV$, where B is the rectangular box given by $B = \{(x, y, z) \mid 0 \leq x \leq 1, -1 \leq y \leq 2, 0 \leq z \leq 3\}$.

3 Triple integrals over general bounded 3D regions

- **Type A 3D region:** between two continuous functions of x and y



- E is the 3D region
- D is the projection (shadow) of E onto the xy -plane
- If E is a type A region, then


- (f, u_1, u_2) continuous
- Integration from the inside out
- Double integral over D can be done using previous techniques (e.g. Type I or II region)

Example 2. Express $\iiint_E x \, dV$ as an iterated integral, where E lies below the plane $z = 1 + x + y$ and above the region in the xy -plane bounded by the curves $y = x^2$ and $y = x$.


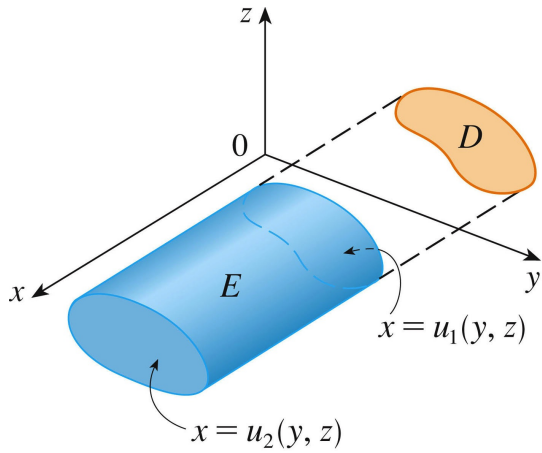
Example 3. Express $\iiint_E \sin(x + yz) dV$ as an iterated integral, where E lies below the surface $z = 1 + x^2 + 4y^2$ and above the region in the xy -plane bounded by the curves $x = 2y$, $x = 0$, and $y = 1$.




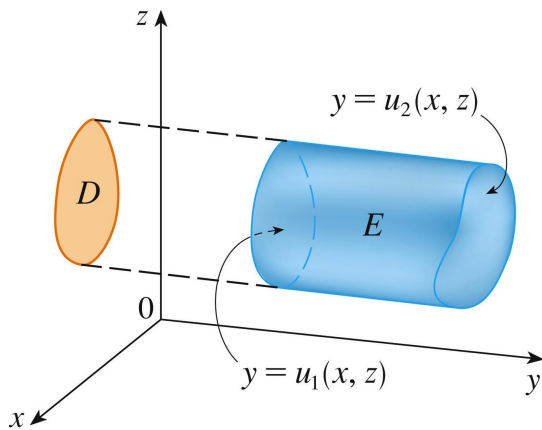
Example 4. Express $\iiint_E y\sqrt{z} dV$ as an iterated integral, where E is the solid tetrahedron enclosed by the coordinate planes and the plane $2x + y + z = 4$.




- **Type B 3D region:** between two continuous functions of y and z



- **Type C 3D region:** between two continuous functions of x and z



Example 5. Express $\iiint_E y\sqrt{z} dV$ as an iterated integral, where E is the tetrahedron enclosed by the coordinate planes and the plane $2x + y + z = 4$. Consider E as a type B region.

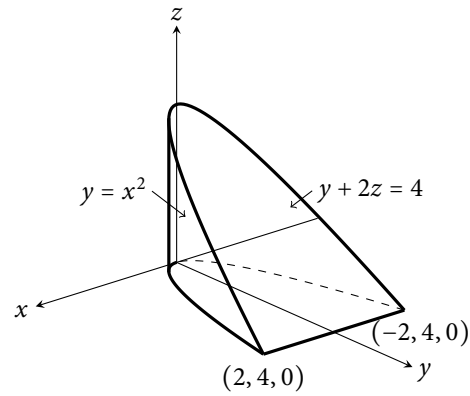


Example 6. Express $\iiint_E y\sqrt{z} \, dV$ as an iterated integral, where E is the tetrahedron enclosed by the coordinate planes and the plane $2x + y + z = 4$. Consider E as a type C region.

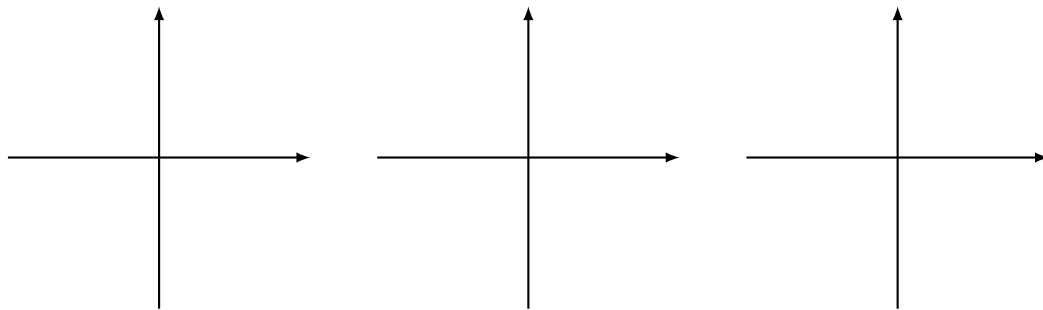
Example 7. Express $\iiint_E \sqrt{x^2 + z^2} \, dV$ as an iterated integral, where E is the region bounded by the paraboloid $y = x^2 + z^2$ and the plane $y = 4$.

Example 8. The figure below shows the region of integration for the integral

$$\int_{-2}^2 \int_{x^2}^4 \int_0^{2-y/2} f(x, y, z) dz dy dx$$



a. Draw the projection of the region of integration onto the xy -plane, the yz -plane, and the xz -plane.



b. Rewrite the integral above as an equivalent iterated integral in the five other orders.